

EMMANUEL MISSION SR SEC SCHOOL, BEAWAR
ONLINE CLASSES
WEEK - 27 (17.09.2020)
CLASS - I

English: Kindly see below

Hindi: Kindly see below

Mathematics: Kindly see below

General Science: Kindly see below

Social Studies: Kindly see below

Computer Science: Kindly see below

General Knowledge: Kindly see below

(Marks-20)

02

- 02

- 02

- 02

- 02

- 02

- 02

- 02

- 02

- 02

(a) C D (b) K N (c) A C (d) K M

EMMANUEL MISSION SR SEC SCHOOL, BEAWAR
HINDI
CLASS – I
Sample Paper

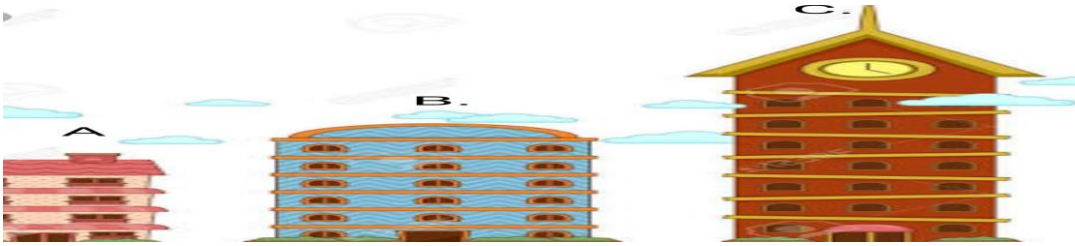
- प्र.1 निम्नलिखित में से बिना मात्रा के शब्द पर सही (✓) का चिह्न लगाइए। (2)
(1) काजल (2) बादल (3) नाला (4) जग
- प्र.2 निम्नलिखित में से स्वर पर सही (✓) का चिह्न लगाइए। (2)
(1) ज (2) अ (3) ट (4) क
- प्र.3 निम्नलिखित में से व्यंजन पर सही (✓) का चिह्न लगाइए। (2)
(1) अ (2) इ (3) ट (4) उ
- प्र.4 निम्नलिखित में से "आ" की मात्रा वाले शब्द पर सही (✓) का चिह्न लगाइए। (2)
(1) गाजर (2) कमल (3) जग (4) कल
- प्र.5 निम्नलिखित में से चार अक्षर वाले शब्द पर सही (✓) का चिह्न लगाइए। (2)
(1) कमल (2) चल (3) घर (4) थरमस
- प्र.6 ट, ठ, ड, ढ, क्या है ? (2)
(1) स्वर (2) व्यंजन (3) ध्वनि (4) लिखित
- प्र.7 वर्ण कितने प्रकार के होते हैं ? (2)
(1) तीन (2) दो (3) चार (4) एक
- प्र.8 उ, ऊ, इ, ई क्या हैं ? (2)
(1) वर्ण (2) स्वर (3) व्यंजन (4) वर्णमाला
- प्र.9 दादाजी का रेडियो सुनना भाषा का कौनसा रूप है ? (2)
(1) मौखिक (2) लिखित (3) दो (4) व्याकरण
- प्र.10 भाषा कितने प्रकार की होती हैं ? (2)
(1) एक (2) तीन (3) दो (4) चार

EMMANUEL MISSION SR SEC SCHOOL, BEAWAR
MATHEMATICS
CLASS – I
Sample Paper

M.M - 20

Q. 1 Which one is taller in size ?


(2)



- a. A b. B c. C d. None of the above

Q.2 Rohan is _____ the pool .

(2)



- A. Inside B. Outside C. Both D. None of the above

Q. 3 Count and choose the right option -

(2)



- A. 9 B. 8 C. 6 D. 4

Q. 4 How many legs does the boy have ?

(2)



- A. 2 B. 1 C. 0 D. 4

Q. 5 How many letters are there in word " DOG " ?

(2)

- A. 3 B. 2 C. 1 D. 0

Q.6 How many wheels are there in a bicycle ?

(2)



- A. 2 B. 3 C. 4 D. 5

Q. 7 As per the given race what is the position of bear ?


(2)



- A. First B. Second C. Third D. Tenth

Q. 8 What is the position of pin from left side ?

(2)



- A. Second B. Fourth C. Sixth D. Ninth

Q. 9 How many letters are there in word " BIRD "?

(2)

- A. 5 B. 4 C. 3 D. 2

Q. 10 Which one is thickest ?

(2)



- a. A b. B. c. C d. None of the above

EMMANUEL MISSION SR SEC SCHOOL, BEAWAR
GENERAL SCIENCE
CLASS – I
Sample Paper

MM-20

- Q.1 A book is a _____. 02**
a. living thing b. natural thing
c. non living thing b. natural, living thing
- Q.2 _____ is a man made thing. 02**
a. tree b. chair c. dog d. bird
- Q.3 Which one is a non-living thing? 02**
a. dog b. cow c. pencil d. tree
- Q.4 A car is a _____. 02**
a. living thing b. non-living thing
c. natural thing d. natural, living thing
- Q.5 Sun is the _____. 02**
a. man made thing b. living thing
c. natural thing d. non-living, man made thing.
- Q.6 A papaya has _____. 02**
a. one seed b. two seeds. c. many seeds d. few seeds
- Q.7 Most flowers grow into 02**
a. leaf b. stem c. fruit d. seeds
- Q.8 An apple has _____ seed/seeds. 02**
a. one seed b. few seeds c. many seeds d. two seeds
- Q.9 Which plant that cannot grow straight? 02**
a. rose b. rice c. money plant d. coconut
- Q.10. Which fruit that have many seeds? 02**
a. mango b. coconut c. watermelon d. litchi

EMMANUEL MISSION SR SEC SCHOOL, BEAWAR
SOCIAL STUDIES
CLASS – I
Sample Paper

MM : 20

1. I would like to become a 2
(a) Doctor (b) Engineer (c) Teacher (d) pilot
2. Sara lives with her _____ 2
(a) Parents (b) Single parent family
(c) Large family (d) Joint family
3. _____ look after us when we are sick. 2
(a) parents (b) Neighbours (c) Family (d) relative
4. Cooks food for the whole family. 2
(a) Father (b) Mother (c) Children (d) Neighbor
5. We should _____ our parents. 2
(a) Obey (b) Disobey (c) Not seen (d) Ignore
6. If we do something wrong, we should say. 2
(a) Sorry (b) Thank you (c) Please (d) Excuse me
7. We should brush our teeth _____ a day. 2
(a) Once (b) Twice (c) Three times (d) none of these
8. My favorite drink is. 2
(a) Tea (b) Milk (c) Juice (d) Coffee
9. We throw the garbage in the _____. 2
(a) dustbin (b) Home (c) Street (d) Anywhere
- 10.A _____ has a father, mother, children, grand parents, uncles, aunts and cousin. 2
(a) Small family (b) large family (c) joint family (d) none of these

EMMANUEL MISSION SR SEC SCHOOL, BEAWAR
COMPUTER
CLASS – I
Sample Paper

MULTIPLE CHOICE QUESTIONS :-

(Marks 20)

Q. 1 Which machine do not need electricity to work?

02

- a. Fan
- b. Computer
- c. Mobile Phone
- d. Cooler

Q. 2 Which of the following is a machine?

02

- a. Computer
- b. Paper
- c. Flower
- d. Football

Q. 3 Which of the following is not a machine?

02

- a. Car
- b. Football
- c. Mobile
- d. Juicer

Q. 4 Which machine is found outside the house?

02

- a. Computer
- b. Crane
- c. Mixer
- d. Juicer

Q. 5 A Computer works very _____?

02

- a. Slow
- b. Fast
- c. Wrong
- d. None of these

Q. 6 A computer never gets _____?

02

- a. Tired
- b. Cried
- c. Both
- d. None of these

Q. 7 Computer works on?

02

- a. Water
- b. Electricity
- c. Air
- d. None of these

Q. 8 Which machine is used to wash clothes?

02

- a. Fan
- b. Mixer
- c. Washing Machine
- d. Car

Q. 9 A computer _____ makes mistakes.

02

- a. Always
- b. Never
- c. Mostly
- d. None of the above

Q. 10 Which type of machine computer is?

02

- a. Worst
- b. Wonderful
- c. Useless
- d. Time consuming

EMMANUEL MISSION SR SEC SCHOOL, BEAWAR
GENERAL KNOWLEDGE
CLASS – I
Sample Paper

MM : 20

1. A famous person plays chess identify that person which is given below in the option and tick (2)



- (a) Abhinav Bindra (c) Viswanathan Anand
(b) Sushil Kumar (d) M S Dhoni
2. A famous person plays badminton identify that person. Which is given below in the option and tick it (2)



- (a) Sania mirza (c) Saina Nehwal
(b) P.V. Sindhu (d) PT usha
3. An instrument which is used to hear music, audio, video etc (2)
(a) Selfie Stick (c) Air conditioner
(b) Head phone (d) Play station
4. A stick which is used to hold mobile phone (2)
(a) Laptop (c) Selfie stick
(b) Smart watch (d) Television
5. A _____ treat us when we fall sick. (2)
(a) Teacher (c) Doctor
(b) Engineer (d) Postman
6. A _____ teaches us (2)
(a) Engineer (c) Postman
(b) teacher (d) Doctor
7. A Cheetah runs _____ (2)
(a) Slow (b) Fast (c) Small (d) Go
8. An Ant is a _____ insect (2)
(a) Big (b) Fat (c) Short (d) Small

9. The name of this fruit is

(2)



- (a) Orange (b) Apple (c) Banana (d) grapes

10. The name of this fruit is

(2)



- (a) Banana (b) Orange (c)! Grapes (d) Water melon